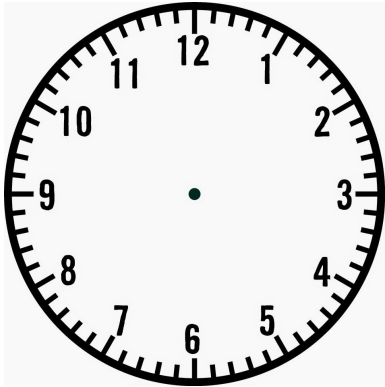
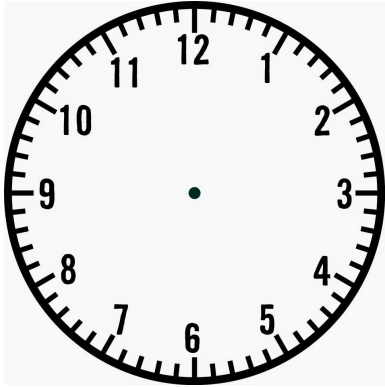
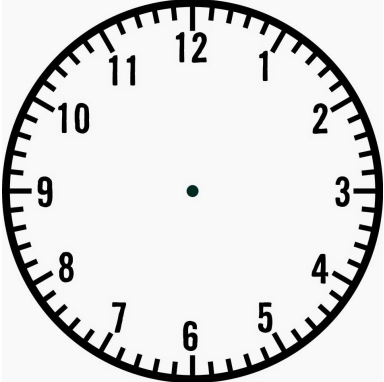
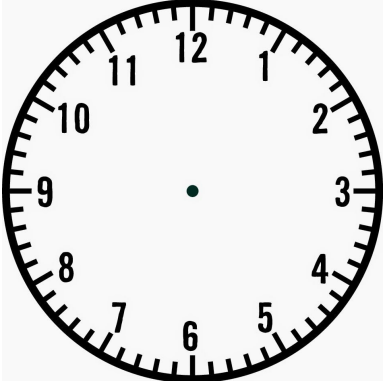



Name: \_\_\_\_\_

**Directions:** Once you are on the website, write the time you see on the analog clock in the five empty clocks on the page. Then write down the digital time of the analog clock in the Attempt 1 column. Continue until the website says you have all of the times right. Write down the correct time on the left side of each clock.

Correct Time	Analog Clock	Attempt 1	Attempt 2	Attempt 3
<div><div></div><div></div><div></div></div>		<div><div></div><div></div><div></div></div>	<div><div></div><div></div><div></div></div>	<div><div></div><div></div><div></div></div>
<div><div></div><div></div><div></div></div>		<div><div></div><div></div><div></div></div>	<div><div></div><div></div><div></div></div>	<div><div></div><div></div><div></div></div>

Correct Time	Analog Clock	Attempt 1	Attempt 2	Attempt 3
<div><div></div><div></div><div></div></div>		<div><div></div><div></div><div></div></div>	<div><div></div><div></div><div></div></div>	<div><div></div><div></div><div></div></div>
<div><div></div><div></div><div></div></div>		<div><div></div><div></div><div></div></div>	<div><div></div><div></div><div></div></div>	<div><div></div><div></div><div></div></div>
<div><div></div><div></div><div></div></div>		<div><div></div><div></div><div></div></div>	<div><div></div><div></div><div></div></div>	<div><div></div><div></div><div></div></div>